


## Labelling Forces


### Car

This car is moving forward. Where will you label the forces of: **gravity**, **thrust**, **air resistance** and **friction**?




### Sky Diver

This sky diver is falling to the ground with his parachute open. Where will you label the forces of: **gravity** and **air resistance**?



### Rubber duck

This rubber duck is floating happily in the bath, where will you place the forces of: **gravity** and **upthrust**?



### Skier

This skier is skiing down the slope. Where will you label the forces of: **thrust**, **air resistance**, **gravity** and **friction**?

