

Fractions help sheet

Unit fractions (1 out of ___)



Unit fractions use only 1 at the top.


$\frac{1}{2}$ $\frac{1}{3}$ $\frac{1}{4}$

Shape: Shade in 1 out of ___ of the shape to show the fraction.

$\frac{1}{2}$ = 1 piece out of 2. $\frac{1}{4}$ = 1 piece out of 4.
The pieces MUST be equal.

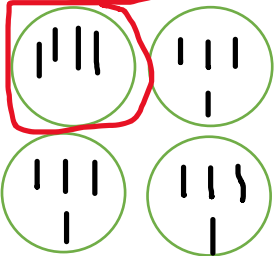
Number: use your groups to help you find 1 out of ___.

$\frac{1}{2}$ of 12 =



1 group out of 2 = 6

$\frac{1}{4}$ of 16 =



1 group out of 4 = 4


You can also use your times tables to help you find fractions.

Non-unit fractions

Non- unit fractions use numbers that aren't 1 at the top.

$\frac{2}{3}$ $\frac{3}{4}$ $\frac{2}{4}$


Shape: Shade in the number out of ___ of the shape to show the fraction.



Eg. $\frac{3}{4}$ = shade 3 out of 4 pieces

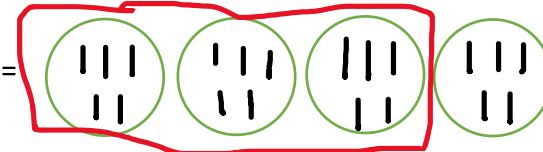
Number: use your groups to help you find the fraction.

$\frac{2}{3}$ of 9 =



2 out of 3 groups = 6

$\frac{3}{4}$ of 20 =



3 out of 4 groups = 15

You can also use your times tables to help you find fractions.